


# MONDAY



1. What is the time?

2.  $2 \times 5 = \quad + \quad = 10$

3. Will this shape fit into A, B or C exactly? 

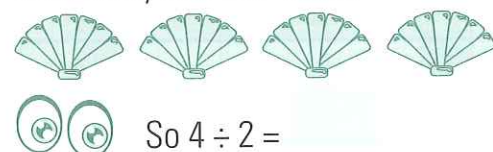
☐ A ☐ B ☐ C



4.  $2 \times 4 = \quad + \quad = 8$

5. Alex caught eleven fish and gave three away. How many fish has Alex got left?

6. Group these 4 shells into lots of 2. How many lots are there?



7.  $7 + 3 =$

8. Halve 10.

9.  $5 + 5 =$

10.  $10 - 3 =$

11.  $9 - 2 =$

12. How many days are in a year?

13. How many days are in a fortnight?

14. I am about  cm tall.

15.  $4 + 2 =$

16. 1 m =  cm

17. Name this shape.



18. Double 4.

19. Is 9 odd or even?

20.  $20 + 30 =$

20

# TUESDAY



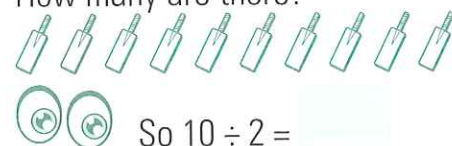
1. What is the time?

2.  $2 \times 6 = \quad + \quad = 12$

3.  $6 + 3 =$

4.  $3 \times 4 = \quad + \quad + \quad = 12$

5. Group these 10 bats into lots of 2. How many are there?



6.  $4 + 5 =$

7. Write eighty-six as a numeral.

8.  $4 + 4 =$

9. Share 5 apples among 5 boys.



apple(s) each

10. Antonio watched TV for 3 hours on Tuesday, 2 hours on Friday and 2 hours on Sunday. How many hours of TV did Antonio watch?



11. 1 cm =  mm

12.  $9 - 9 =$

13. How many days are in a week?

14.  minutes = 1 hour

15. Name this shape.



16. Double 10.

17. Halve 20.

18. Is 16 odd or even?

19. 2 m =  cm

20.  $600 + 30 + 2 =$

20

# WEDNESDAY



1. What is the time?

2.  $8 \times 0 =$

3.  $3 \times 10 = \quad + \quad + \quad = 30$


4. Write thirty-seven as a numeral.

5.  $4 + 6 =$

6. Group these 6 balls into groups of 2. How many are there?



7.  $10 + 6 =$

8. Will this shape fit into A, B or C exactly? 



9.  $10 - 8 =$

10.  $7 - 4 =$

11. How many days are in a year?

12.  hours = 1 day

13. How many weeks are in a fortnight?

14. 100 cm =  m

15. How many seasons are in a year?

16. How many months are in a year?

17. Name this shape.



18. Double 3.

19.  $40 + 30 =$

20.  $200 + 70 + 5 =$

20

# THURSDAY




1. What is the time?

2.  $2 \times 7 = \quad + \quad =$

3.  $9 \times 1 =$

4. Will this shape fit into A, B or C?



5.  $8 \div 2 =$

6. Write eighty-nine as a numeral.

7. Alex caught twelve fish and gave two fish to his teacher and four fish to his pet cat named Baba. How many fish has Alex left over?



8.  $10 + 8 =$

9. 1 cm =  mm

10.  $0 + 4 =$

11.  $16 - 6 =$

12. Shade the left arrow.



13. 10 mm =  cm

14.  $4 + 3 =$

15.  seconds = 1 minute.

16. Name this shape.



17. Halve 18.

18. Double 5.

19.  $700 + 60 + 3 =$

20.  $60 + 20 =$

20